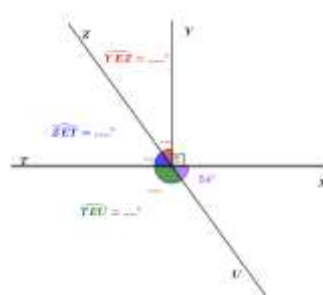
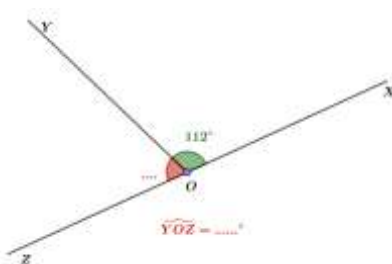
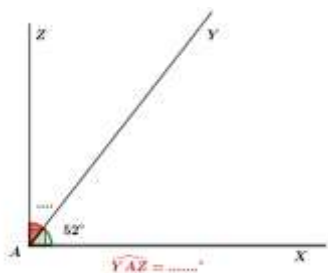




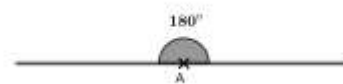
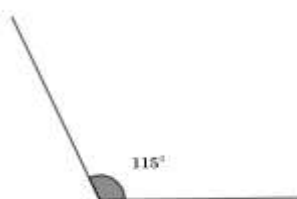

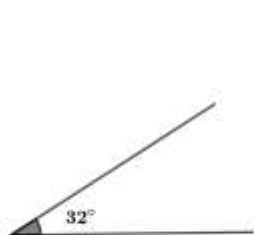
Exercice 1

Dans chacune des figures suivantes, calcule les mesures des angles manquantes :



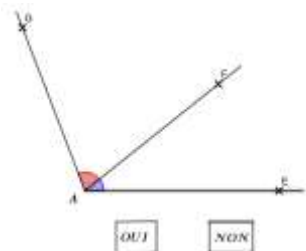
Exercice 2

Préciser la nature des angles suivants :

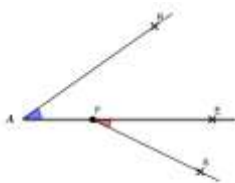


Exercice 3

Est-ce que les angles suivants sont adjacents ?



OUI NON



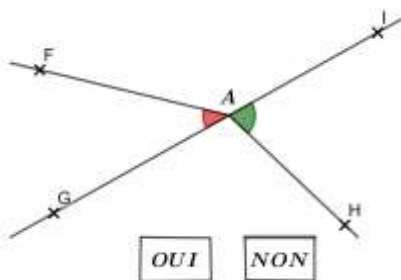
OUI NON



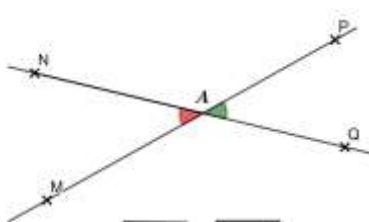
OUI NON

Exercice 4

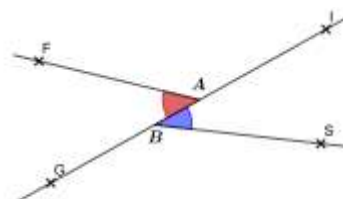
Sur les figures suivantes, indiquer si les angles colorés sont opposés par le sommet :



OUI NON



OUI NON



OUI NON

Exercice 5

Sachant que $\angle QAP = 43^\circ$, calculer les Angles PAN ; NAM ; MAQ

